


准考證號：_____

國立臺南藝術大學
104 學年度中國音樂學系七年一貫制學士班入學考試
聽寫試題

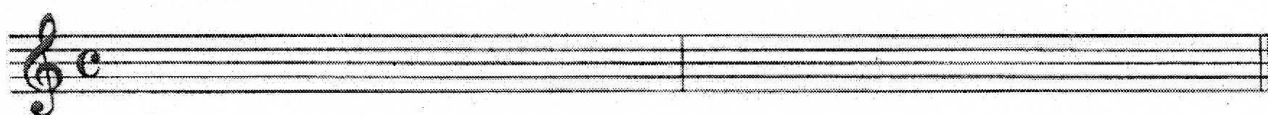
一. 音程(請寫出音高與音程度數)20%

1 2 3 4 5 6 7 8 9 10

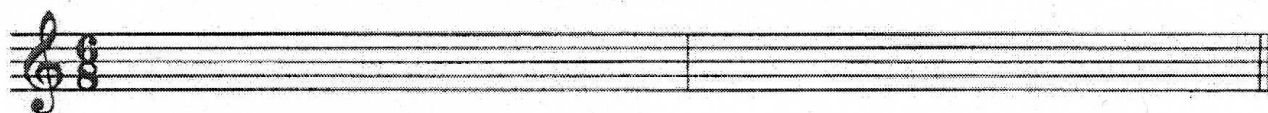


A grand staff consisting of a treble clef on the top staff and a bass clef on the bottom staff. The staff is divided into ten equal measures, each corresponding to a number from 1 to 10 written above it. The staves are currently empty.

二. 單聲部節奏16%


1. 

A single treble clef staff with a common time signature (C). The staff is divided into two equal measures, both of which are empty.

2. 


A single treble clef staff with a 3/8 time signature. The staff is divided into two equal measures, both of which are empty.

三. 單旋律24%




A single treble clef staff with a 3/4 time signature. The staff is divided into two equal measures, both of which are empty.

四. 兩聲部聽寫：(1)兩聲部旋律 24% (2)單旋律與節奏 16%

1. 

A grand staff with a treble clef on top and a bass clef on bottom, with a 3/4 time signature. The staff is divided into two equal measures, both of which are empty.

2. 

A grand staff with a treble clef on top and a bass clef on bottom, with a 3/8 time signature. The staff is divided into two equal measures, both of which are empty.